

CANDIDATE
NAME

--

CENTRE
NUMBER

--	--	--	--	--

CANDIDATE
NUMBER

--	--	--	--

CAMBRIDGE INTERNATIONAL MATHEMATICS

0607/21

Paper 2 (Extended)

October/November 2019

45 minutes

Candidates answer on the Question Paper.

Additional Materials: Geometrical Instruments

READ THESE INSTRUCTIONS FIRST

Write your centre number, candidate number and name on all the work you hand in.

Write in dark blue or black pen.

Do not use staples, paper clips, glue or correction fluid.

You may use an HB pencil for any diagrams or graphs.

DO NOT WRITE IN ANY BARCODES.

Answer **all** the questions.

CALCULATORS MUST NOT BE USED IN THIS PAPER.

All answers should be given in their simplest form.

You must show all the relevant working to gain full marks and you will be given marks for correct methods even if your answer is incorrect.

The number of marks is given in brackets [] at the end of each question or part question.

The total number of marks for this paper is 40.

This document consists of **8** printed pages.

Formula List

For the equation $ax^2 + bx + c = 0$ $x = \frac{-b \pm \sqrt{b^2 - 4ac}}{2a}$

Curved surface area, A , of cylinder of radius r , height h . $A = 2\pi rh$

Curved surface area, A , of cone of radius r , sloping edge l . $A = \pi rl$

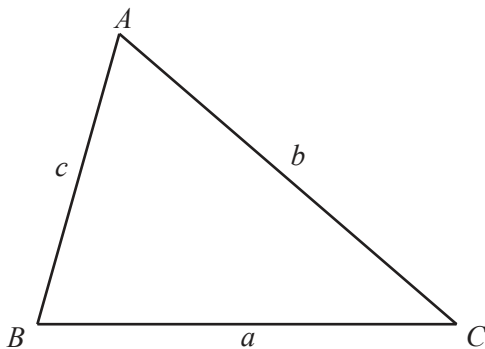
Curved surface area, A , of sphere of radius r . $A = 4\pi r^2$

Volume, V , of pyramid, base area A , height h . $V = \frac{1}{3}Ah$

Volume, V , of cylinder of radius r , height h . $V = \pi r^2 h$

Volume, V , of cone of radius r , height h . $V = \frac{1}{3}\pi r^2 h$

Volume, V , of sphere of radius r . $V = \frac{4}{3}\pi r^3$



$$\frac{a}{\sin A} = \frac{b}{\sin B} = \frac{c}{\sin C}$$

$$a^2 = b^2 + c^2 - 2bc \cos A$$

$$\text{Area} = \frac{1}{2}bc \sin A$$

Answer **all** the questions.

- 1 Work out $15 + 14 \times 2$.

..... [1]

- 2 Here is a list of numbers.

21 23 29 33 39 63 91 92

From the list, write down

(a) a factor of 46,

[1]

(b) a prime number.

[1]

- 3 List the integer values of x such that $-3 < x \leq 1$.

..... [2]

- 4 At a railway station, the probability that any train departs on time is $\frac{7}{8}$.

The number of trains in one day is 72.

Work out the expected number of trains that depart on time.

..... [1]

- 5 Work out $\frac{3}{4} \div 4\frac{1}{2}$.

Give your answer as a fraction in its lowest terms.

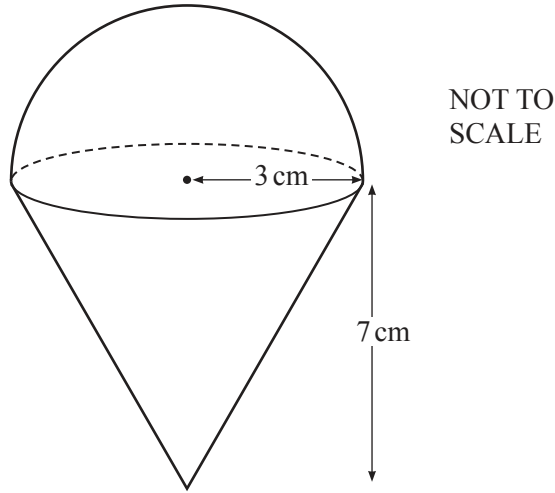
..... [2]

6 9, 27, 81, 243, ...

Find the n th term of this sequence.

..... [2]

7



The diagram shows a hemisphere joined to a cone.
 The hemisphere has a radius of 3 cm.
 The cone has a radius of 3 cm and a height of 7 cm.
 The total volume of the shape is $k\pi \text{ cm}^3$.

Find the value of k .

$k =$ [3]

8 Find the value of $8^{\frac{4}{3}}$.

..... [1]

9 $\mathbf{p} = \begin{pmatrix} 12 \\ -5 \end{pmatrix}$

Find

(a) $2\mathbf{p}$,

$$\begin{pmatrix} \\ \end{pmatrix} \quad [1]$$

(b) $|\mathbf{p}|$.

..... [2]

10 Solve.

$$4w^2 - 8w - 5 = 0$$

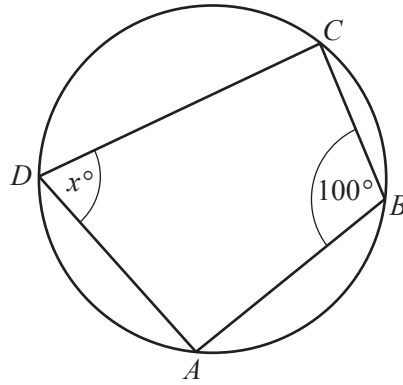
$w = \dots\dots\dots$ or $w = \dots\dots\dots$ [3]

11 y varies inversely as \sqrt{x} .
When $x = 16$, $y = 9$.

Find y in terms of x .

$y = \dots\dots\dots$ [2]

12 (a)

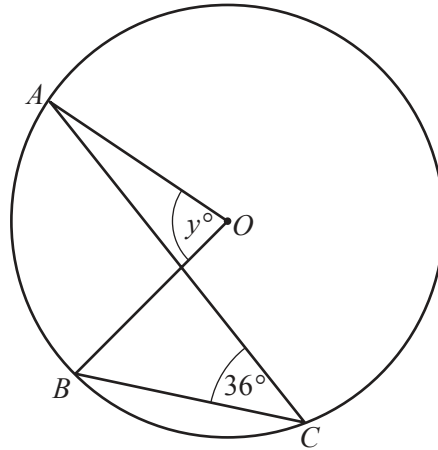
NOT TO
SCALE

The points A , B , C and D lie on the circle.

Find the value of x .

$x = \dots\dots\dots$ [1]

(b)

NOT TO
SCALE

The points A , B and C lie on the circle, centre O .

Find the value of y .

$y = \dots\dots\dots$ [1]

13 (a) Simplify $\sqrt{20} + \sqrt{125}$.

..... [2]

(b) Rationalise the denominator and simplify your answer.

$$\frac{18}{\sqrt{7}-1}$$

..... [2]

14 Make l the subject of the formula $T = 2\pi\sqrt{\frac{l}{g}}$.

$l =$ [3]

15 Simplify $(t^{27})^{\frac{1}{3}}$.

..... [1]

Questions 16 and 17 are printed on the next page.

- 16 A is the point $(0, 8)$ and B is the point $(6, 0)$.
The line L passes through B and is perpendicular to AB .

Find the equation of L .

..... [4]

- 17 Simplify $\frac{ab - ac + 2b - 2c}{a^2 - 4}$.

..... [4]

Permission to reproduce items where third-party owned material protected by copyright is included has been sought and cleared where possible. Every reasonable effort has been made by the publisher (UCLES) to trace copyright holders, but if any items requiring clearance have unwittingly been included, the publisher will be pleased to make amends at the earliest possible opportunity.

To avoid the issue of disclosure of answer-related information to candidates, all copyright acknowledgements are reproduced online in the Cambridge Assessment International Education Copyright Acknowledgements Booklet. This is produced for each series of examinations and is freely available to download at www.cambridgeinternational.org after the live examination series.

Cambridge Assessment International Education is part of the Cambridge Assessment Group. Cambridge Assessment is the brand name of the University of Cambridge Local Examinations Syndicate (UCLES), which itself is a department of the University of Cambridge.